

中文姓名: \_\_\_\_\_

17(35)-1

英文姓名: \_\_\_\_\_

成績: \_\_\_\_\_

6 9	2 2
- 3 1	+ 3 2

1 0	1 5	2 0
- 7	- 3	- 1 4
- 2	- 1 0	- 1

1 0	1 5	2
+ 1 5	+ 1 1	+ 9
+ 1 5	+ 5	+ 9

有几个“等分”? (等分 = 一样大)

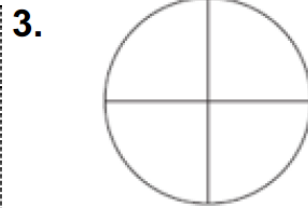
Please write down how many “equal” area shapes there are.




\_\_\_\_\_ 个相等的部份




\_\_\_\_\_ 0 \_\_\_\_\_ 个相等的部份



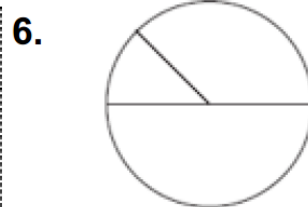
\_\_\_\_\_ 个相等的部份



\_\_\_\_\_ 个相等的部份



\_\_\_\_\_ 个相等的部份



\_\_\_\_\_ 个相等的部份