

中文姓名: _____

英文姓名: _____

成績 : _____

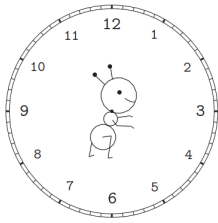
$$\begin{array}{r} 6 \square \\ - 7 \\ \hline 61 \end{array}$$

$$\begin{array}{r} 67 \\ - \square \\ \hline \square 0 \end{array}$$

20	6	6
- 15	+ 4	+ 3

1. Please draw the clock hands:

1. 画时针跟分针：

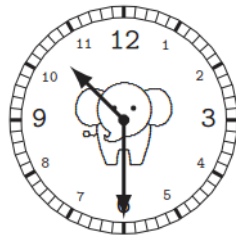


十一点三十分。

 11 : 30.

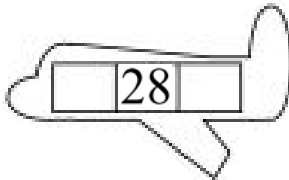
2. Please write down what time it is:

2. 这是几点？



Please write down before and after numbers:

For calendar question: before number is yesterday's date & after number is tomorrow's date.



1.Q: 今天是几月几号/日?

1.A: 今天是 _____

1.Q: 今天星期几?

1.A: _____

2.Q: 明天是几月几号/日?

2.A: _____

2.Q: 明天星期几?

2.A: _____

3.Q: 昨天是几月几号/日?

3.A: _____

3.Q: 昨天星期几?

3.A: _____

Q: What is the date today?

A: _____

Q: What is the day of the week today?

A: _____

Q: What is the date tomorrow?

A: _____

Q: What is the day of the week tomorrow?

A: _____

Q: What was the date yesterday?

A: _____

Q: What was the day of the week yesterday?

A: _____

- 1. 今天是三月二十八日。
- 1. 今天是星期四。
- 2. 明天是三月二十九日。
- 2. 明天是星期五。
- 3. 昨天是三月二十七日。
- 3. 昨天是星期三。