

中文姓名: _____

11(29)-2

英文姓名: _____

成績: _____

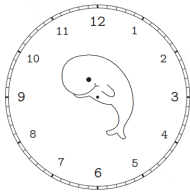
$$\begin{array}{r} 6 \square \\ + \quad 9 \\ \hline \square 7 \end{array}$$

$$\begin{array}{r} 8 \square \\ - \quad 2 \\ \hline \square 4 \end{array}$$

3 0	5 3
+ 5 5	- 3 9

1. Please draw the clock hands:

1. 画时针跟分针:




二点。

02 : 00.

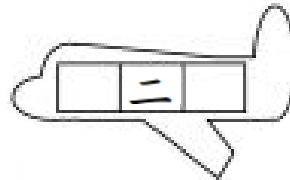
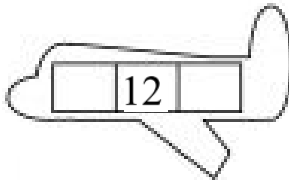
2. Please write down what time it is:

2. 这是几点?



Please write down before and after numbers:

For calendar question: before number is yesterday's date & after number is tomorrow's date.



1.Q: 今天是几月几号/日?

1.A: _____

1.Q: 今天星期几?

1.A: _____

2.Q: 明天是几月几号/日?

2.A: _____

2.Q: 明天星期几?

2.A: _____

3.Q: 昨天是几月几号/日?

3.A: _____

3.Q: 昨天星期几?

3.A: _____

Q: What is the date today?

A: _____

Q: What is the day of the week today?

A: _____

Q: What is the date tomorrow?

A: _____

Q: What is the day of the week tomorrow?

A: _____

Q: What was the date yesterday?

A: _____

Q: What was the day of the week yesterday?

A: _____

1. 今天是三月十二日。
1. 今天是星期二。
2. 明天是三月十三日。
2. 明天是星期三。
3. 昨天是三月十一日。
3. 昨天是星期一。